

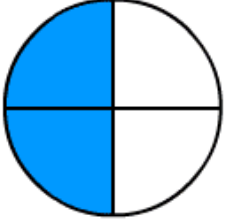


Adı Soyadı :

Numarası :

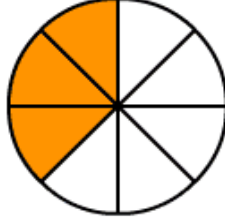
Konu: Kesirler (Pay ve Payda Arasındaki İlişkiyi Açıklayalım) Etkinliği

Aşağıda modelle verilen kesirleri örnekteki gibi yazalım.



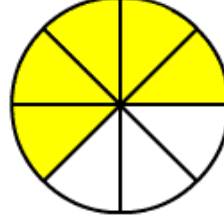
.....

.....



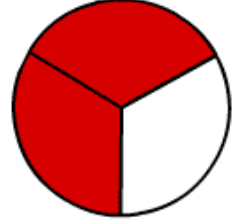
.....

.....




.....

.....



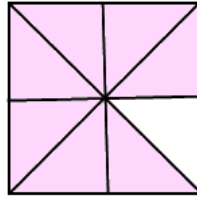
.....

.....



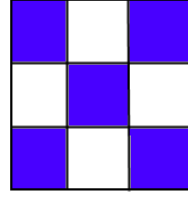
.....

.....



.....

.....



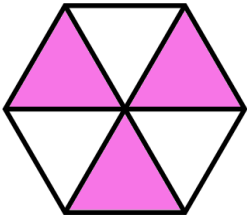
.....

.....



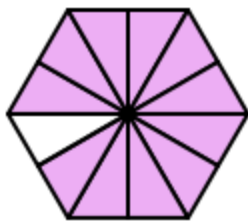
.....

.....



.....

.....



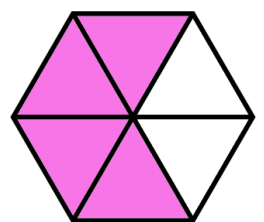
.....

.....



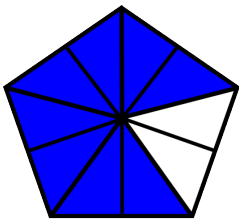
.....

.....



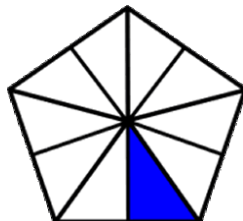
.....

.....



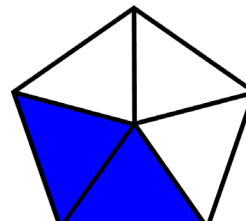
.....

.....



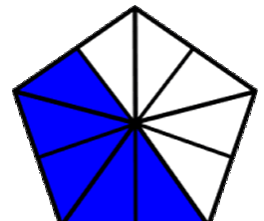
.....

.....



.....

.....

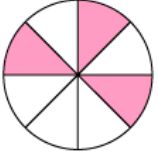


.....

.....

Aşağıda modelleri verilen kesirlerin yandaki kutulardaki yazılışlarını daire içine alınız.

1)



$$\frac{4}{8}$$

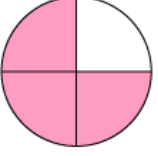
$$\frac{3}{7}$$

$$\frac{3}{8}$$

$$\frac{5}{7}$$

$$\frac{5}{8}$$

2)



$$\frac{1}{4}$$

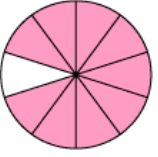
$$\frac{2}{3}$$

$$\frac{2}{4}$$

$$\frac{3}{5}$$

$$\frac{3}{4}$$

3)



$$\frac{8}{10}$$

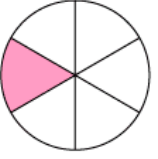
$$\frac{9}{10}$$

$$\frac{1}{10}$$

$$\frac{7}{10}$$

$$\frac{6}{10}$$

4)



$$\frac{1}{6}$$

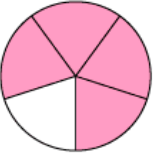
$$\frac{4}{6}$$

$$\frac{1}{5}$$

$$\frac{5}{6}$$

$$\frac{1}{7}$$

5)



$$\frac{3}{5}$$

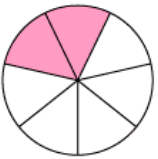
$$\frac{4}{4}$$

$$\frac{1}{5}$$

$$\frac{5}{5}$$

$$\frac{4}{5}$$

6)



$$\frac{4}{7}$$

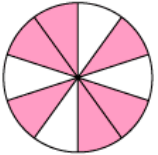
$$\frac{2}{6}$$

$$\frac{5}{7}$$

$$\frac{2}{7}$$

$$\frac{3}{6}$$

7)



$$\frac{5}{10}$$

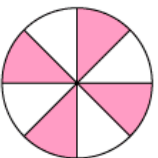
$$\frac{4}{9}$$

$$\frac{6}{10}$$

$$\frac{4}{10}$$

$$\frac{6}{9}$$

8)



$$\frac{3}{8}$$

$$\frac{5}{8}$$

$$\frac{3}{7}$$

$$\frac{4}{8}$$

$$\frac{5}{7}$$

Aşağıdaki kesirlerin okunuşunu örnekteki gibi yazınız.

• $\frac{1}{3}$: Üçte bir • $\frac{2}{4}$:

• $\frac{1}{3}$: • $\frac{3}{6}$:

• $\frac{4}{5}$: • $\frac{1}{8}$:

• $\frac{5}{9}$: • $\frac{4}{10}$:

• $\frac{2}{20}$: • $\frac{6}{11}$:

• $\frac{10}{25}$: • $\frac{5}{15}$:

• $\frac{3}{7}$: • $\frac{1}{100}$:

• $\frac{7}{8}$: • $\frac{8}{9}$:

Aşağıda okunuşunu verilen kesirleri örnekteki gibi yazınız.

• Dörtte üç : $\frac{3}{4}$ • Beşte bir : $\frac{....}{....}$

• Dokuzda beş : $\frac{....}{....}$ • Onda altı : $\frac{....}{....}$

• Sekiz yedi : $\frac{....}{....}$ • Yirmide üç : $\frac{....}{....}$

• On birde iki : $\frac{....}{....}$ • Beşte beş : $\frac{....}{....}$

• İkide bir : $\frac{....}{....}$ • Yedide bir : $\frac{....}{....}$

• Dörtte iki : $\frac{....}{....}$ • On üçte iki : $\frac{....}{....}$

• Yüzde beş : $\frac{....}{....}$ • Altıda dört : $\frac{....}{....}$

• Sekizde altı : $\frac{....}{....}$ • Onda dokuz : $\frac{....}{....}$